



Prénom

Date

Combien de points a-t-on ajoutés ou retirés sous le chapeau ?

- = 1 point
- = 10 points
- = 100 points


1



On a ajouté jetons noirs, jeton gris jeton blanc.

On a donc ajouté points.


2



On a ajouté jeton noir, jeton gris jetons blancs.

On a donc ajouté points.

3



On a retiré jeton noir, jeton gris jetons blancs.

On a donc retiré points.