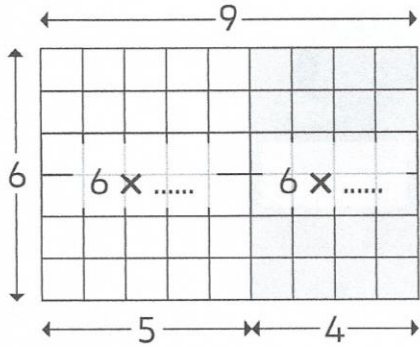


Prénom

Date

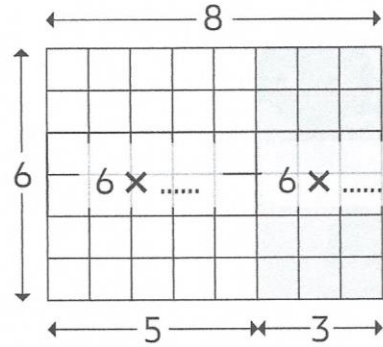
1 Complète et calcule.



$$6 \times 9 = \dots \times \dots + \dots \times \dots$$

$$6 \times 9 = \dots + \dots$$

$$6 \times 9 = \dots$$

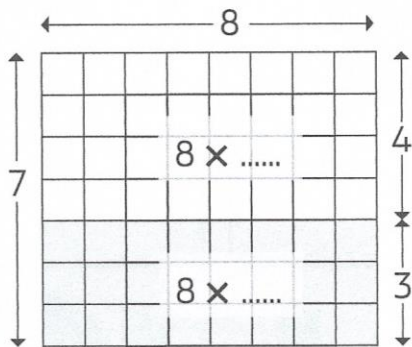


$$6 \times 8 = \dots \times \dots + \dots \times \dots$$

$$6 \times 8 = \dots + \dots$$

$$6 \times 8 = \dots$$

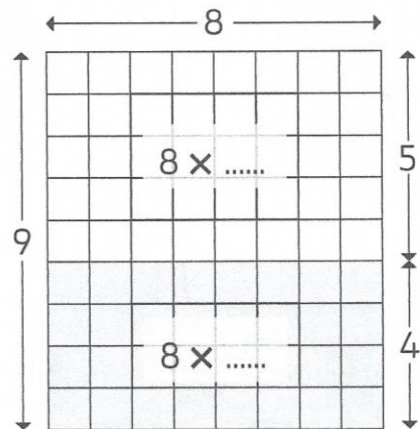
2 Complète et calcule.



$$7 \times 8 = \dots \times \dots + \dots \times \dots$$

$$7 \times 8 = \dots + \dots$$

$$7 \times 8 = \dots$$



$$9 \times 8 = \dots \times \dots + \dots \times \dots$$

$$9 \times 8 = \dots + \dots$$

$$9 \times 8 = \dots$$