


Prénom

Date


1 Complète les égalités.




$$24 + 10 = \dots\dots\dots$$




$$32 + 10 = \dots\dots\dots$$



$$28 + 10 = \dots\dots\dots$$



$$41 + 10 = \dots\dots\dots$$



$$53 + 10 = \dots\dots\dots$$

2 Complète les égalités.

$$25 + 10 = \dots\dots\dots$$

$$52 + 10 = \dots\dots\dots$$

$$47 + 10 = \dots\dots\dots$$

$$39 + 10 = \dots\dots\dots$$